

Thursday 2nd April

Maths

Go on the given number and take away ten.

taking away ten

Addition/subtraction

N3



<table border="1"><tr><td>1</td><td>2</td><td>3</td><td>4</td><td>5</td><td>6</td><td>7</td><td>8</td><td>9</td><td>10</td></tr><tr><td>11</td><td>12</td><td>13</td><td>14</td><td>15</td><td>16</td><td>17</td><td>18</td><td>19</td><td>20</td></tr></table> <p>$16 - 10 = \square$</p>	1	2	3	4	5	6	7	8	9	10	11	12	13	14	15	16	17	18	19	20	<table border="1"><tr><td>1</td><td>2</td><td>3</td><td>4</td><td>5</td><td>6</td><td>7</td><td>8</td><td>9</td><td>10</td></tr><tr><td>11</td><td>12</td><td>13</td><td>14</td><td>15</td><td>16</td><td>17</td><td>18</td><td>19</td><td>20</td></tr></table> <p>$13 - 10 = \square$</p>	1	2	3	4	5	6	7	8	9	10	11	12	13	14	15	16	17	18	19	20
1	2	3	4	5	6	7	8	9	10																																
11	12	13	14	15	16	17	18	19	20																																
1	2	3	4	5	6	7	8	9	10																																
11	12	13	14	15	16	17	18	19	20																																
<table border="1"><tr><td>1</td><td>2</td><td>3</td><td>4</td><td>5</td><td>6</td><td>7</td><td>8</td><td>9</td><td>10</td></tr><tr><td>11</td><td>12</td><td>13</td><td>14</td><td>15</td><td>16</td><td>17</td><td>18</td><td>19</td><td>20</td></tr></table> <p>$17 - 10 = \square$</p>	1	2	3	4	5	6	7	8	9	10	11	12	13	14	15	16	17	18	19	20	<table border="1"><tr><td>1</td><td>2</td><td>3</td><td>4</td><td>5</td><td>6</td><td>7</td><td>8</td><td>9</td><td>10</td></tr><tr><td>11</td><td>12</td><td>13</td><td>14</td><td>15</td><td>16</td><td>17</td><td>18</td><td>19</td><td>20</td></tr></table> <p>$11 - 10 = \square$</p>	1	2	3	4	5	6	7	8	9	10	11	12	13	14	15	16	17	18	19	20
1	2	3	4	5	6	7	8	9	10																																
11	12	13	14	15	16	17	18	19	20																																
1	2	3	4	5	6	7	8	9	10																																
11	12	13	14	15	16	17	18	19	20																																
<table border="1"><tr><td>1</td><td>2</td><td>3</td><td>4</td><td>5</td><td>6</td><td>7</td><td>8</td><td>9</td><td>10</td></tr><tr><td>11</td><td>12</td><td>13</td><td>14</td><td>15</td><td>16</td><td>17</td><td>18</td><td>19</td><td>20</td></tr></table> <p>$15 - 10 = \square$</p>	1	2	3	4	5	6	7	8	9	10	11	12	13	14	15	16	17	18	19	20	<table border="1"><tr><td>1</td><td>2</td><td>3</td><td>4</td><td>5</td><td>6</td><td>7</td><td>8</td><td>9</td><td>10</td></tr><tr><td>11</td><td>12</td><td>13</td><td>14</td><td>15</td><td>16</td><td>17</td><td>18</td><td>19</td><td>20</td></tr></table> <p>$19 - 10 = \square$</p>	1	2	3	4	5	6	7	8	9	10	11	12	13	14	15	16	17	18	19	20
1	2	3	4	5	6	7	8	9	10																																
11	12	13	14	15	16	17	18	19	20																																
1	2	3	4	5	6	7	8	9	10																																
11	12	13	14	15	16	17	18	19	20																																
<table border="1"><tr><td>1</td><td>2</td><td>3</td><td>4</td><td>5</td><td>6</td><td>7</td><td>8</td><td>9</td><td>10</td></tr><tr><td>11</td><td>12</td><td>13</td><td>14</td><td>15</td><td>16</td><td>17</td><td>18</td><td>19</td><td>20</td></tr></table> <p>$12 - 10 = \square$</p>	1	2	3	4	5	6	7	8	9	10	11	12	13	14	15	16	17	18	19	20	<table border="1"><tr><td>1</td><td>2</td><td>3</td><td>4</td><td>5</td><td>6</td><td>7</td><td>8</td><td>9</td><td>10</td></tr><tr><td>11</td><td>12</td><td>13</td><td>14</td><td>15</td><td>16</td><td>17</td><td>18</td><td>19</td><td>20</td></tr></table> <p>$14 - 10 = \square$</p>	1	2	3	4	5	6	7	8	9	10	11	12	13	14	15	16	17	18	19	20
1	2	3	4	5	6	7	8	9	10																																
11	12	13	14	15	16	17	18	19	20																																
1	2	3	4	5	6	7	8	9	10																																
11	12	13	14	15	16	17	18	19	20																																

Teacher's instructions

On each grid, colour green the number which is ten less than the number in the orange squares. Complete the subtractions.

- Choose five numbers between 20 and 30. Subtract ten from each. Draw a grid to help you.

Malti

Aqra s-sentenza u qabbel mal-istampa t-tajba.

Aqra dawn is-sentenzi.








1. Mario u Pamela qegħdin jilagħbu.
2. Il-papà jridhom jidħlu ġewwa.
3. It-tfal għandhom in-nervi.
4. Mario u Pamela qegħdin jaraw it-televixin.
5. It-tfal qegħdin jieklu.
6. Sar il-ħin. Mario u Pamela jridu jorqdu.




Poġġi dawn l-istampi wara xulxin biex tiffirma storja.



1 Read and circle.

- | | | | | |
|---|---|-----------------------|-------------|--------------|
| 1 |  | Can you see a plane? | Yes, I can. | No, I can't. |
| 2 |  | Can you see the moon? | Yes, I can. | No, I can't. |
| 3 |  | Can you see a bird? | Yes, I can. | No, I can't. |
| 4 |  | Can you see a doll? | Yes, I can. | No, I can't. |
| 5 |  | Can you see the sun? | Yes, I can. | No, I can't. |

2 Look and write *I can see* or *I can't see*.



1	_____	the sun.
2	_____	the moon.
3	_____	a tree.
4	_____	a car.
5	_____	a house.

3 Look and write.



- 1 I can see the sun.
- 2 I can't _____ moon.
- 3 | _____ a car.
- 4 _____ a plane.
- 5 _____ an elephant.

Answers

These answers are provided as a guidance, so as to check and correct the children's work.

Maths

$16 - 10 = 6$

$13 - 10 = 3$

$17 - 10 = 7$

$11 - 10 = 1$

$15 - 10 = 5$

$19 - 10 = 9$

$12 - 10 = 2$

$14 - 10 = 4$

Malti

Aqra dawn is-sentenzi.



1. Mario u Pamela qegħdin jilagħbu.
2. Il-papà jridhom jidhlu ġewwa.
3. It-tfal għandhom in-nervi.
4. Mario u Pamela qegħdin jaraw it-televisin.
5. It-tfal qegħdin jieklu.
6. Sar il-hin. Mario u Pamela jridu jorqdu.

Poġġi dawn l-istampi wara xulxin biex tiffirma storja.



English

1. Yes, I can.
2. No, I can't.
3. Yes, I can.
4. No, I can't.
5. No, I can't.

1. I can't see the sun.
2. I can see the moon.
3. I can see a tree.
4. I can't see a car.
5. I can see a house.

1. I can see the sun.
2. I can't see the moon.
3. I can't see a car.
4. I can see a plane.
5. I can't see an elephant.