



# Thursday 23<sup>rd</sup> April

## Maths

### Odd and even numbers.

odd and even

Odd and even **N34**

	
1	2

#### Teacher's instructions

Write the even numbers in order on the LOUD crows. Write the odd numbers in order on the quiet doves. Write the numbers in the correct columns.

- ④ Select ten number cards between 20 and 50. Sort them into odd and even.

Ikteb il-kelmiet ħbieb fuq il-klieb.



Where is Mobi? Write.

in on under next to between



1 on the table




2 \_\_\_\_\_ the chair



3 \_\_\_\_\_ the box



4 \_\_\_\_\_ the book and the lamp



5 \_\_\_\_\_ the computer



6 \_\_\_\_\_ the chair




7 \_\_\_\_\_ the box



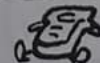
8 \_\_\_\_\_ the bed



9 \_\_\_\_\_ the lamp



10 \_\_\_\_\_ the chair and the bed



## Answers

*These answers are provided as a guidance, so as to check and correct the children's work.*

### **Maths**

Odd numbers: 1, 3, 5, 7, 9, 11, 13, 15, 17, 19.

Even numbers: 2, 4, 6, 8, 10, 12, 14, 16, 18, 20.

### **Malti**

idejn	ċavetta
xofftejn	kalzetta
riglejn	sarvetta
widnejn	paletta

### **English**

1. On the table.
2. Under the chair.
3. In the box.
4. Between the book and the lamp.
5. Next to the computer.
6. Under the chair.
7. On the box.
8. In the bed.
9. Next to the lamp.
10. Between the chair and the bed.