

Tuesday 7th April


Maths

Choose 2 toys each time. Find the total cost.

adding tens


Addition and money

N32



$20\text{c} + 30\text{c} = 50\text{c}$	$\square\text{c} + \square\text{c} = \square\text{c}$
$\square\text{c} + \square\text{c} = \square\text{c}$	$\square\text{c} + \square\text{c} = \square\text{c}$
$\square\text{c} + \square\text{c} = \square\text{c}$	$\square\text{c} + \square\text{c} = \square\text{c}$
$\square\text{c} + \square\text{c} = \square\text{c}$	$\square\text{c} + \square\text{c} = \square\text{c}$

Choose two toys each time. Find the total cost.
 Choose three toys. Find the total cost. Repeat.



Sum:
 spade ball bear
 $20\text{c} + 30\text{c} + 40\text{c} = 90\text{c}$

L-Għid

Hemm 8 affarijiet li huma differenti
Aghmel ċirku madwarhom



Liema figolla hija għal dawn it-tfal?

L-Għia




1 Write *this* or *these*.


1 What is _____?
It is an apple.



2 What are _____?
They are snakes.




3 What are _____?
They are bees.




4 What is _____?
It is a butterfly.



2 Write the questions and the answers.
These words can help you.



1 What _____ this?



It _____




2 What _____ these?



They _____

3 What _____



4 What _____



Answers

These answers are provided as a guidance, so as to check and correct the children's work.

Maths

Some examples of different combinations.

1. $30c + 10c = 40c$
2. $20c + 40c = 60c$
3. $10c + 20c = 30c$
4. $60c + 30c = 90c$

English

1. What is this?
It is an apple.
2. What are these?
They are snakes.
3. What are these?
They are bees.
4. What is this?
It is a butterfly.

- | | |
|--------------------|-----------------|
| 1. What is this? | It is a nest. |
| 2. What are these? | They are trees. |

3. What is this?

It is a wall.

4. What are these?

They are birds.